

6

Addition

Level



Score

100

Date

Name



1

Write each number sentence below. Then answer each question.

10 points per question

(1)



If you buy 4 more boxes, how many boxes are there?



$$2 + 4 =$$


<Ans.>

boxes

(2)



If you put in 2 more flowers, how many flowers are there?



$$3 + =$$

<Ans.>

flowers


(3)



If your mother gives you 3 more candies, how many candies will you have?

<Ans.>

(4)



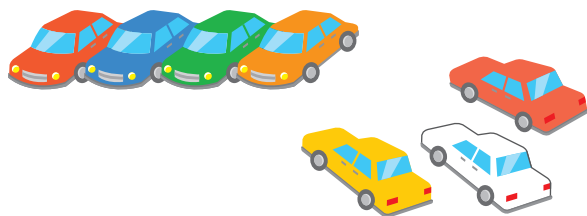
If 4 more turtles come to the beach, how many turtles will there be?

<Ans.>

2 Write each number sentence below. Then answer each question.

10 points per question


- (1) 4 cars are parked. 3 more cars park. How many cars are there in total?



$$4 + 3 =$$

⟨Ans.⟩ _____ cars

- (2) 5 birds are eating food. 2 more birds come. How many birds are there in total?



⟨Ans.⟩ _____

- (3) 6 children are in the playground. 2 more children come to play. How many children are there in total?

⟨Ans.⟩ _____

- (4) You have 7 pencils. If I give you 2 pencils, how many total pencils will you have?

⟨Ans.⟩ _____

- (5) There are 3 dogs eating. If 2 more dogs come and eat, how many total dogs will be eating?

⟨Ans.⟩ _____

- (6) There are 4 apples on the table. If your mother puts 5 more apples on the table, how many total apples will be on the table?

⟨Ans.⟩ _____

Apples, cars and dogs—oh my!

